

DAV Kapildev Public School, Kadru, Ranchi
HOLIDAY HOMEWORK
CLASS – 1(Session-2020-2021)
SUBJECT- ENGLISH

Q.1. Write two rhyming words for each:-

- | | |
|-----------|-----------|
| a) tree - | e) tall - |
| b) keep - | f) well - |
| c) wool - | g) hill - |
| d) noon - | h) feet - |

Q.2. Rewrite the jumbled letters:-

- a) ozo -
- b) polo -
- c) orfo -
- d) cholos -
- e) mrobo -

Q.3. Write five words for each blend sound and draw its pictures:-

- a) 'ee'
- b) 'll'
- c) 'oo'

Q.4. Learn and write five sentences on " My School"

Q.5. Learn question answers of chapters 1 to 6.

Draw a line to match each word to its opposite.

Happy •

• Wet

Old •

• Night

Dry •

• Cold

Hot •

• Young

Day •

• Good

Right •

• Heavy

Bad •

• Sad

Light •

• Left

Scanned with CamScanner





NAMING WORDS

Circle all the pictures that names places.

Example: School, Zoo, California.



Orange



Kitchen



Clock



Church



London



Ship



Ground



Train



Home



Computer



Island



Flowers



Pond



Guava



Prison





NAMING WORDS

Circle all the pictures that names animals.
Example: Dog, Cat, Hen.



Apple




Ant



Cake



Hen



Elephant



Pineapple



Cow



Banana



Carrot



Butterfly



Dog



Fish



Parrot



Lemon



Cat





NAMING WORDS

Circle all the pictures that names things.

Example: Pen, Banana, Apple.



Television



Camel



Bus



Tomato



Strawberry



Eye



Sister



Nose



Doctor



Hand



Boat



Baby



Swing



Tiger




Umbrella

Use one page for each sentence



I brush my teeth.



I bathe with soap.



I comb my hair.



I cut my nails.



I polish my shoes.



NAMING WORDS

Circle all the pictures that names persons.
write naming words for persons

Example: Jenny, Mother, Dad, Teacher.



Penguin



Brother



Farmer



Cot



Lawyer



leopard



Student



Fruits



Driver



Money



Father



Giraffe




Grandfather



Bird



Man



डी.ए.पी. कपिलदेव पब्लिक स्कूल, कठरु, रौंघी

2020-2021

कक्षा-1

अवकाश गृह कार्य

(क) निम्नलिखित वाक्यों के पाँच पेज सुलेख लिखें।

- हमें बड़ों का आदर करना चाहिए।
- हमें सदा सच बोलना चाहिए।
- जल ही जीवन है।
- हमें पेड़-पौधे लगाना चाहिए।
- हमें समय का सही उपयोग करना चाहिए।

(ख) लिख कर याद करें।

- गिनती(एक से दस)
- लिंग बदलें
- मेरा विद्यालय
- मेरा परिवार

(ग) आ (i) और इ (i) की मात्रा वाले चार-चार चित्र बनाकर रंग भरें और उनका नाम लिखें।

(घ) पाठ 3 और पाठ 4 में दिए गए प्रश्न-उत्तर और खाली स्थान को याद करें।

(ङ) कविता राजा बेटा को याद कर के लिखें।

(च) कठिन शब्दों को पाँच-पाँच बार याद कर के लिखें।

ताकतवर
भगवान

कसरत
रुक्मिणी

उपवन
चिटिया

अखिल

साइकिल

तिनका

डलिया

अतिथि

आकार

रिम ड्रि म

मिट्टाई

नारियल

D A V KAPILDEV PUBLIC SCHOOL, KADRU, RANCHI

HOLIDAY HOMEWORK (2020-2021)

CLASS - I

SUBJECT - EVS

- Write five lines on "Myself".
- Learn & write the fill ups of Chapter-1.
- Learn & write the hard words of Chapter-2.
- Learn & write the questions and answers of Chapter-3.
- Paste the pictures of five things which keep our body clean.
- Make a "Necklace" with the help of different Pulses.



The above picture is for reference

- Draw, name and colour pictures of three good food and three bad food.
- Plant a tree in your garden.

• *Worksheet :-*

Complete the worksheet with the help of given words-

My  can _____

_____.

My  can _____

_____.

My  can _____

_____.

My  can _____

_____.

hear run chew jump listen skip
hold touch clap sing taste

NOTE :- DO THE HOMEWORK NEATLY.

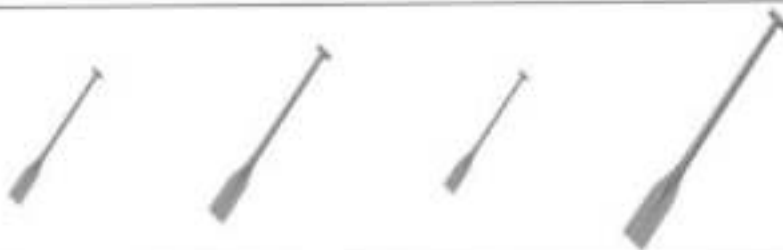
Maths

Colour the big one green and small one blue



Begin with the shortest object and write

1/ 2/ 3 /4



Scanned with CamScanner

What comes before and after

_____ 29 _____

_____ 36 _____

_____ 14 _____

_____ 40 _____

_____ 19 _____

_____ 6 _____

_____ 24 _____



Write in words

39 _____

41 _____

24 _____

13 _____

18 _____

30 _____

27 _____

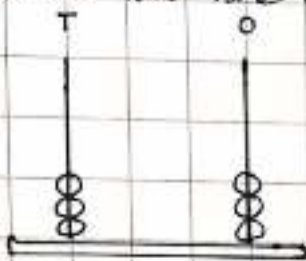
45 _____

33 _____

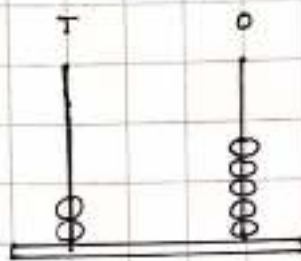
Scanned with CamScanner

Place value

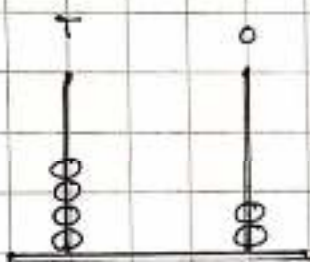
What number does the abacus show?
write in the



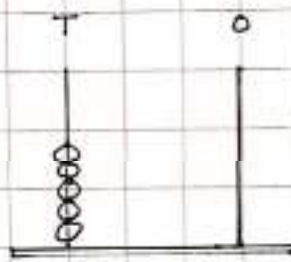
+ =



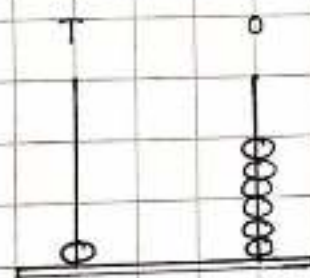
+ =



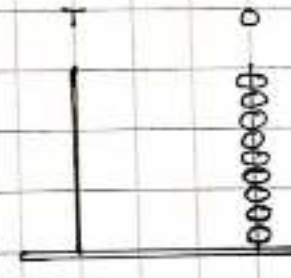
+ =



+ =

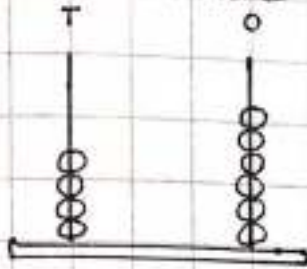


+ =

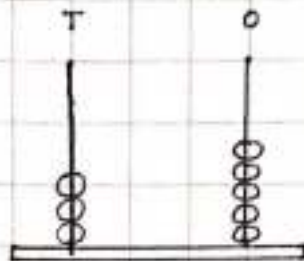


+ =

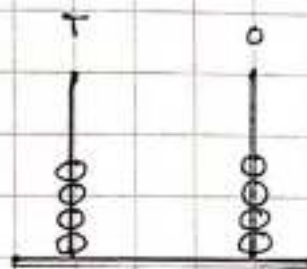
What number does the abacus show?
write in the



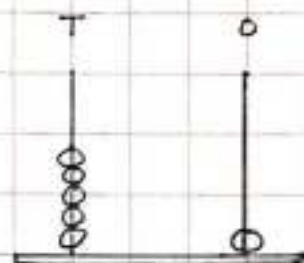
+ =



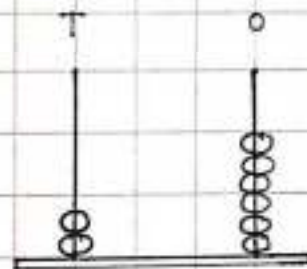
+ =



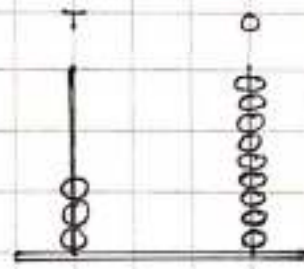
+ =



+ =



+ =



+ =

Write table of 2, in numerals and words

$$2 \times 1 = 2 \quad \text{Two}$$

$$2 \times 2 =$$

$$2 \times 3 =$$

$$2 \times 4 =$$

$$2 \times 5 =$$

$$2 \times 6 =$$

$$2 \times 7 =$$

$$2 \times 8 =$$

$$2 \times 9 =$$

$$2 \times 10 =$$

Scanned with CamScanner

Fill in the blanks with missing numbers

1	2		4	5
6		8	9	10
11	12	13	14	15
16	17	18		20
21		23	24	25
	27	28	29	30
31	32	33		35
36	37		39	40
	42	43	44	45
46	47		49	

Scanned with CamScanner



Write down the tens and the ones

in the boxes for the given numbers

$\begin{array}{c} \boxed{12} \\ \swarrow \quad \searrow \\ \boxed{} \quad \boxed{} \\ \text{tens} \quad \text{ones} \end{array}$	$\begin{array}{c} \boxed{3} \\ \swarrow \quad \searrow \\ \boxed{} \quad \boxed{} \\ \text{tens} \quad \text{ones} \end{array}$	$\begin{array}{c} \boxed{16} \\ \swarrow \quad \searrow \\ \boxed{} \quad \boxed{} \\ \text{tens} \quad \text{ones} \end{array}$
$\begin{array}{c} \boxed{10} \\ \swarrow \quad \searrow \\ \boxed{} \quad \boxed{} \\ \text{tens} \quad \text{ones} \end{array}$	$\begin{array}{c} \boxed{17} \\ \swarrow \quad \searrow \\ \boxed{} \quad \boxed{} \\ \text{tens} \quad \text{ones} \end{array}$	$\begin{array}{c} \boxed{19} \\ \swarrow \quad \searrow \\ \boxed{} \quad \boxed{} \\ \text{tens} \quad \text{ones} \end{array}$
$\begin{array}{c} \boxed{20} \\ \swarrow \quad \searrow \\ \boxed{} \quad \boxed{} \\ \text{tens} \quad \text{ones} \end{array}$	$\begin{array}{c} \boxed{22} \\ \swarrow \quad \searrow \\ \boxed{} \quad \boxed{} \\ \text{tens} \quad \text{ones} \end{array}$	$\begin{array}{c} \boxed{35} \\ \swarrow \quad \searrow \\ \boxed{} \quad \boxed{} \\ \text{tens} \quad \text{ones} \end{array}$
$\begin{array}{c} \boxed{39} \\ \swarrow \quad \searrow \\ \boxed{} \quad \boxed{} \\ \text{tens} \quad \text{ones} \end{array}$	$\begin{array}{c} \boxed{47} \\ \swarrow \quad \searrow \\ \boxed{} \quad \boxed{} \\ \text{tens} \quad \text{ones} \end{array}$	$\begin{array}{c} \boxed{43} \\ \swarrow \quad \searrow \\ \boxed{} \quad \boxed{} \\ \text{tens} \quad \text{ones} \end{array}$
$\begin{array}{c} \boxed{41} \\ \swarrow \quad \searrow \\ \boxed{} \quad \boxed{} \\ \text{tens} \quad \text{ones} \end{array}$	$\begin{array}{c} \boxed{44} \\ \swarrow \quad \searrow \\ \boxed{} \quad \boxed{} \\ \text{tens} \quad \text{ones} \end{array}$	$\begin{array}{c} \boxed{50} \\ \swarrow \quad \searrow \\ \boxed{} \quad \boxed{} \\ \text{tens} \quad \text{ones} \end{array}$

Write down the tens and the ones
in the boxes for the given numbers

$\begin{array}{c} \boxed{12} \\ \swarrow \quad \searrow \\ \boxed{} \quad \boxed{} \\ \text{tens} \quad \text{ones} \end{array}$	$\begin{array}{c} \boxed{3} \\ \swarrow \quad \searrow \\ \boxed{} \quad \boxed{} \\ \text{tens} \quad \text{ones} \end{array}$	$\begin{array}{c} \boxed{16} \\ \swarrow \quad \searrow \\ \boxed{} \quad \boxed{} \\ \text{tens} \quad \text{ones} \end{array}$
$\begin{array}{c} \boxed{10} \\ \swarrow \quad \searrow \\ \boxed{} \quad \boxed{} \\ \text{tens} \quad \text{ones} \end{array}$	$\begin{array}{c} \boxed{17} \\ \swarrow \quad \searrow \\ \boxed{} \quad \boxed{} \\ \text{tens} \quad \text{ones} \end{array}$	$\begin{array}{c} \boxed{19} \\ \swarrow \quad \searrow \\ \boxed{} \quad \boxed{} \\ \text{tens} \quad \text{ones} \end{array}$
$\begin{array}{c} \boxed{20} \\ \swarrow \quad \searrow \\ \boxed{} \quad \boxed{} \\ \text{tens} \quad \text{ones} \end{array}$	$\begin{array}{c} \boxed{22} \\ \swarrow \quad \searrow \\ \boxed{} \quad \boxed{} \\ \text{tens} \quad \text{ones} \end{array}$	$\begin{array}{c} \boxed{35} \\ \swarrow \quad \searrow \\ \boxed{} \quad \boxed{} \\ \text{tens} \quad \text{ones} \end{array}$
$\begin{array}{c} \boxed{39} \\ \swarrow \quad \searrow \\ \boxed{} \quad \boxed{} \\ \text{tens} \quad \text{ones} \end{array}$	$\begin{array}{c} \boxed{47} \\ \swarrow \quad \searrow \\ \boxed{} \quad \boxed{} \\ \text{tens} \quad \text{ones} \end{array}$	$\begin{array}{c} \boxed{43} \\ \swarrow \quad \searrow \\ \boxed{} \quad \boxed{} \\ \text{tens} \quad \text{ones} \end{array}$
$\begin{array}{c} \boxed{41} \\ \swarrow \quad \searrow \\ \boxed{} \quad \boxed{} \\ \text{tens} \quad \text{ones} \end{array}$	$\begin{array}{c} \boxed{44} \\ \swarrow \quad \searrow \\ \boxed{} \quad \boxed{} \\ \text{tens} \quad \text{ones} \end{array}$	$\begin{array}{c} \boxed{50} \\ \swarrow \quad \searrow \\ \boxed{} \quad \boxed{} \\ \text{tens} \quad \text{ones} \end{array}$

Write the numbers less than 14
in the given box

5 7 20 12 19 16
18 11 10 13 21 41

Write the numbers greater than
27 in the given box.

31 13 28 42 24 46
23 32 19 29 30 9

Write the numbers less than 35
in the given box.

23 49 37 32 30 41
39 18 31 46 17 44

DAV KAPILDEV PUBLIC SCHOOL, KADRU, RANCHI

Holiday Home Work

Visual Art, Session-2020-'21

CLASS-I: - Any two-paper craft by using waste paper